

Metric Conversions and Metric Ruler practice for FINAL

First, fill in the metric chart, then use it to make the following conversions:

K			base		c	

1. 125 cm = _____ m

2. 34 m = _____ Km

3. 56 m = _____ cm

4. 421 DKm = _____ dm

5. 23 cg = _____ g

6. 440 g = _____ Kg

7. 34 Kg = _____ g

8. 234 mg = _____ g

9. 245 mL = _____ L

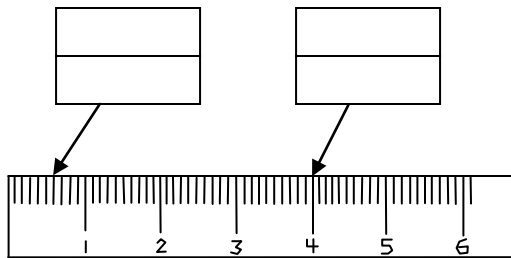
10. 23 L = _____ DKL

11. 45 L = _____ mL

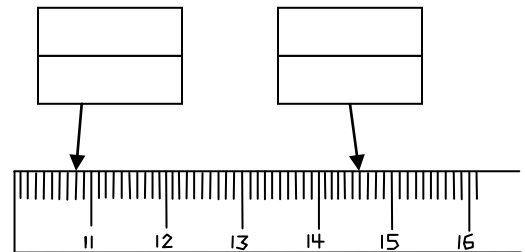
12. 12 dL = _____ L

For each arrow, write the number of centimeters and the number of millimeters. Label each number.

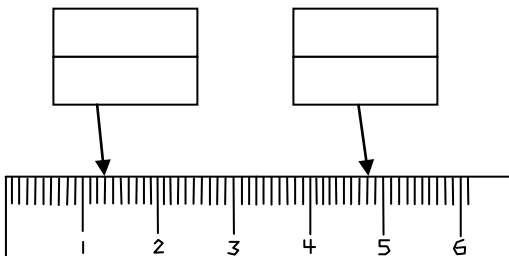
1]



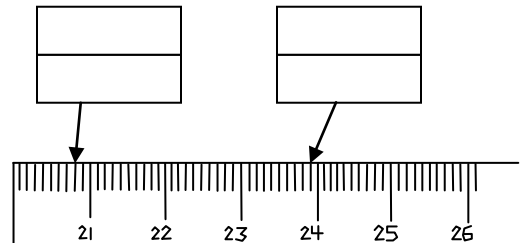
4]



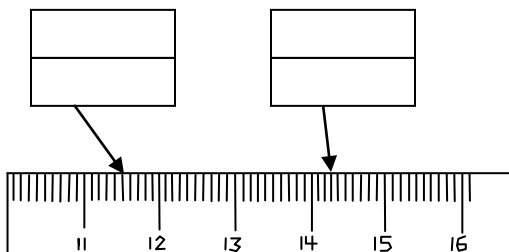
2]



5]



3]



6]

